


FAIRY ADDITION⁺⁺



Add together picture below and write down how many fairy are there

 $+$  $=$ 4


 $+$  $=$ _____

 $+$  $=$ _____

 $+$  $=$ _____

 $+$  $=$ _____

FAIRY ADDITION⁺⁺



Add together picture below and write down how many fairy are there



+



=

3



+



=



+



=



+



=




+





=

FAIRY ADDITION⁺



Add together picture below and write down how many fairy are there

 $+$  $=$ 8

 $+$  $=$


 $+$  $=$

 $+$  $=$

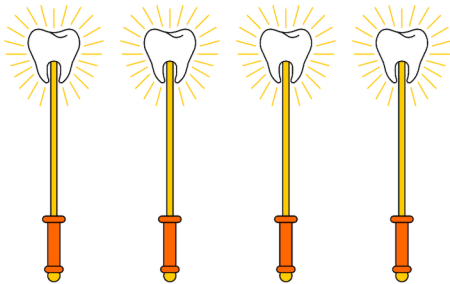
 $+$  $=$



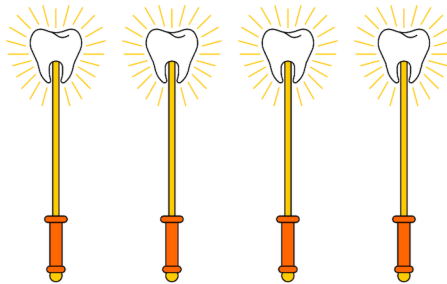
FAIRY ADDITION⁺



Add together picture below and write down how many fairy are there



+



=

8



+



=



+



=



+



=



+



=



FAIRY ADDITION⁺



Count and write the answer

1

10

+ 3

13

2

09

+ 5

3

12

+ 9

4

02

+ 8

5

08

+ 6

6

01

+ 7

7

15

+ 3

8

11

+ 5

9

16

+ 1

12

05

+ 7

13

08

+ 4

14

06

+ 6



FAIRY ADDITION⁺

Count and write the answer



1

18

+ 2

20

2

05

+ 9

3

17

+ 7

4

08

+ 5

5

12

+ 1

6

11

+ 2

7

09

+ 1

8

08

+ 6

9

07

+ 5

12

17

+ 3

13

14

+ 2

14

06

+ 3



FAIRY ADDITION⁺

Count and write the answer



1

05

+ 7

12

2

10

+ 2

3

08

+ 4

4

11

+ 4

5

14

+ 2

6

18

+ 1

7

15

+ 0

8

17

+ 1

9

15

+ 3

12

04

+ 8

13

08

+ 2

14

08

+ 3



FAIRY ADDITION⁺⁺

Count and write the answer

07

+ 5

12

10

+ 6

08

+ 2

12

+ 6

15

+ 2

09

+ 5

13

+ 2

19

+ 3

15

+ 1

09

+ 6

08

+ 4

11

+ 4

16

+ 1





FAIRY ADDITION⁺

Count and write the answer

11

+ 3

1

4

18

+ 5

07

+ 5

10

+ 5

09

+ 5

07

+ 3

08

+ 1

11

+ 3

12

+ 2

08

+ 2

09

+ 2

14

+ 1

05

+ 3





FAIRY ADDITION⁺

Count and write the answer

10

+ 0

1

0

08

+ 3

04

+ 3

14

+ 6

18

+ 3

09

+ 5

14

+ 6

08

+ 0

14

+ 1

06

+ 3

17

+ 1

11

+ 3

07

+ 5

